

Name \_\_\_\_\_

Date \_\_\_\_\_

## Geography Terms Review

Match the terms to the correct definition. Write the letter on the line.

\_\_\_\_\_ ocean

\_\_\_\_\_ plain

\_\_\_\_\_ bay

\_\_\_\_\_ delta

\_\_\_\_\_ river

\_\_\_\_\_ isthmus

\_\_\_\_\_ plateau

\_\_\_\_\_ mountain

\_\_\_\_\_ canyon

\_\_\_\_\_ island

\_\_\_\_\_ peninsula

\_\_\_\_\_ valley

\_\_\_\_\_ hill

\_\_\_\_\_ volcano

a. A(n) \_\_\_\_\_ is an inlet of a sea or ocean where the land curves inward and forms an indentation. It is larger than a cove.

b. A(n) \_\_\_\_\_ is a narrow strip of land with water on both sides. It joins two large areas of land.

c. A(n) \_\_\_\_\_ is a large, flat area of land that is higher than the surrounding land.

d. A(n) \_\_\_\_\_ is a piece of land completely surrounded by water.

e. A(n) \_\_\_\_\_ is a large, tall mass of rock with steep sides. It is much higher than a hill.

f. A(n) \_\_\_\_\_ is a piece of land nearly surrounded by water or projecting out into a body of water.

g. A(n) \_\_\_\_\_ is a raised area or mound of land. It is smaller than a mountain.

h. A(n) \_\_\_\_\_ is a vent or opening in the Earth's crust from which ash, steam, and/or lava can escape.

i. A(n) \_\_\_\_\_ is a low place between mountains.

j. A(n) \_\_\_\_\_ is a deep narrow valley with steep sides and often with a stream flowing through it.

k. A(n) \_\_\_\_\_ is a large natural stream of water flowing in a channel to the sea, an ocean, a lake, a stream, or another river.

l. A(n) \_\_\_\_\_ is a tract of sediment deposited at the mouth of a river.

m. A(n) \_\_\_\_\_ is a large area of flat land with few trees. It can also be known as a prairie, grassland, or savanna.


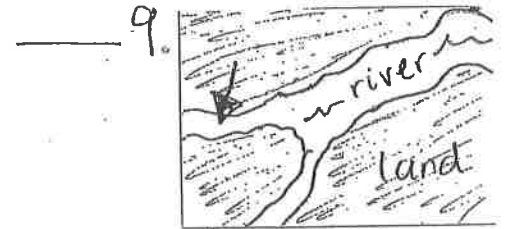

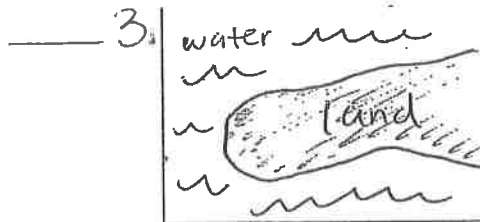


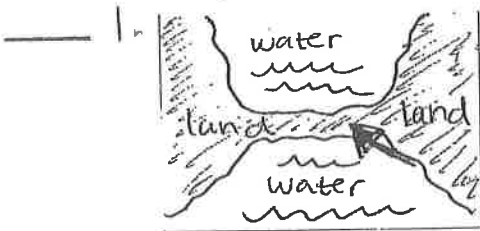
n. A(n) \_\_\_\_\_ is a large body of salt water that surrounds a continent.

# Geo-Feature Picture Identification

Match each picture below with the correct geographic term from the word bank. Two words will not be used at all.


## Word Bank

- A. Delta
- B. Fjord
- C. Harbor
- D. Isthmus
- E. Lake
- F. Mesa
- G. Mountain range
- H. Peninsula
- I. Plain
- J. Tributary
- K. Valley
- L. Volcano



## Make a Match

Can you tell the difference between a plain and a plateau? How about between a gulf and a strait? Study the names and pictures of the landforms and bodies of water on the bulletin board. Then match each geographic term to its correct definition. Write the letter of the correct answer on the line provided.



\_\_\_ 1. archipelago

\_\_\_ 2. bay

\_\_\_ 3. cape

\_\_\_ 4. desert

\_\_\_ 5. hill

\_\_\_ 6. lake

\_\_\_ 7. mountain

\_\_\_ 8. plain

\_\_\_ 9. plateau

\_\_\_ 10. river

\_\_\_ 11. sea

\_\_\_ 12. strait

\_\_\_ 13. tributary

\_\_\_ 14. valley

\_\_\_ 15. volcano

**A.** A projected part of a coastline that juts out into water.

**B.** A broad area of mostly flat, low-lying land.

**C.** A raised area of land that is lower than a mountain and often has a rounded top.

**D.** A large stream of water that runs into a lake, sea, or ocean.

**E.** A large group or chain of islands.

**F.** A narrow channel of water that connects two larger bodies of water.

**G.** An area of low-lying land between mountains or hills.

**H.** A broad area of mostly flat land at high elevation.

**I.** A body of water surrounded entirely by land. It usually has freshwater, not salt water.

**J.** A body of water partly enclosed by land, but having a wide outlet to the sea.

**K.** An opening in a mountain or hill that may erupt with lava, gases, and ash.

**L.** A stream or river that flows into a larger stream or river.

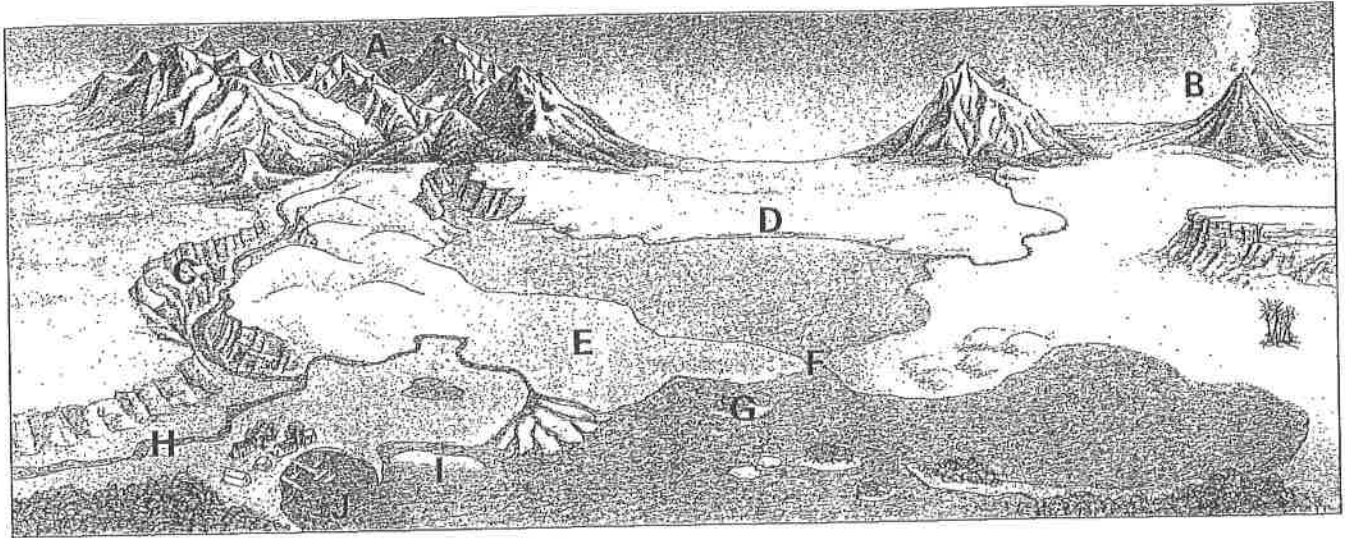
**M.** A large body of water, partly or entirely surrounded by land. It is usually larger than a lake and has salt water.

**N.** A high, rounded or pointed landform, higher than a hill, often having steep rocky sides.

**O.** Dry, barren land.

## Applying Geography Skills: Identifying Landforms and Water Bodies

Use this diagram and your knowledge of geography to complete the task below.



Landforms and water bodies are marked A to J on the diagram. Label them below, using the terms in the Word Bank.

- |         |                    |
|---------|--------------------|
| A _____ | F _____            |
| B _____ | G <i>same as I</i> |
| C _____ | H _____            |
| D _____ | I <i>same as G</i> |
| E _____ | J _____            |

Word Bank				
bay	coast	volcano	<del>islet</del>	tributary
canyon	island - <i>use twice</i>	plain	strait	mountain range